


VIDYA NIKETAN (BIRLA PUBLIC SCHOOL), PILANI (RAJ.)



BIRLA EDUCATION TRUST, PILANI (RAJASTHAN)

COMMON SCHOLASTIC ASSESSMENT 202

For Admission to Class-VII

SUBJECTS: HINDI, ENGLISH, MATHEMATICS, APTITUDE TEST

Maximum Time: 2.00 Hours

Maximum Marks: 100

(To be filled in by the candidate)

Name of the Candidate:

Father's Name:

Studying in Class:

Class in which admission is sought:

Name of Examination Centre:

Mobile No.:

[For Office Use Only]

1. Invigilator's Signature

2. Signature of Examiner

Hindi	
English	
Mathematics	
Aptitude	
TOTAL	

SUBJECT: HINDI

Time: 30 Min.

SET 1

M.M.: 25

प्रश्न 1— अशुद्ध शब्दों को शुद्ध करके लिखिए —

(1)

क— अगामी

ख— अनूकूल

प्रश्न 2—वर्ण—विन्यास कीजिए —

(1)

क— प्रतीक्षा

ख—अभिज्ञान

प्रश्न 3—निम्नलिखित शब्दों के तत्सम रूप लिखिए—

(1)

क—दही —————

ख—मोर —————

प्रश्न 4—निम्नलिखित शब्दों से भाववाचक संज्ञा बनाइए—

(1)

क— सुन्दर —————

ख— वीर

प्रश्न 5—निम्नलिखित शब्दों के लिंग परिवर्तित कर पुनः लिखिए —

(2)

क—कवि कविता लिख रहा है । ।

ख—युवक सो रहा है ।

प्रश्न 6—निम्नलिखित शब्दों के वचन परिवर्तित कर लिखिए —

(2)

क— बालिका कपड़ा धो रही है ।

ख—वह गुड़िया से खेल रही है ।

प्रश्न 7— निम्नलिखित वाक्य में रेखांकित पदों में कारक के भेद लिखिए — (2)

क— वृक्ष से पत्ते गिर रहे हैं ।

ख—राम राजा दशरथ के पुत्र थे ।

प्रश्न 8 निम्नलिखित वाक्यों में सर्वनाम पहचान कर भेद कर लिखिए – (2)

क – कौन आया है ?

ख – कोई गाना गा रहा है ।

प्रश्न 9 – निम्नलिखित वाक्य में विशेषण शब्दों को रेखांकित कर उनके भेद बताइए – (2)

क – कुछ फल लाओ ।

ख – अंगूर मीठा है ।

प्रश्न 10 – निम्नलिखित शब्दों के दो-दो पर्यायवाची शब्द लिखिए – (2)

क – जल – _____, _____ ।

ख – वायु – _____, _____ ।

प्रश्न 11 – वाक्यांशों के लिए एक शब्द लिखिए – (2)

क – सप्ताह में होने वाला _____ ।

ख – जो ईश्वर में विश्वास न रखता हो _____ ।

प्रश्न 12 – समरूपी भिन्नार्थक शब्दों के अर्थ लिखिए – (2)

क – अपकार

उपकार

ख – कुल

कूल

प्रश्न 13 – मुहावरों के अर्थ लिखकर वाक्य में प्रयोग कीजिए – (2)

क – आस्तीन का साँप –

ख – आँखें खुलना –

प्रश्न 14 – 'मेरा विद्यालय' या 'मेरा प्रिय खेल' विषय पर अनुच्छेद लिखिए – (लगभग 50 शब्द)
(3)

TIME : 30 min

Q.1. Read the passage carefully and answer the questions that follow.

1. Laughter is a way of showing happiness. We laugh only when we are really happy. Everyone of us loves to laugh. That's why funny films or comedies are so popular. Is there any one whom jokes or tit-bits do not tickle to laugh? Hardly any.

2. Laughter refreshes and relaxes us. It lightens our minds by removing stress and strain. It lessens our worry. In this way it proves to be a very good tonic for the mind. When our mind is free from all sorts of worry and tension, we enjoy good mental health. And good mental health contributes a lot to our good physical health. That is why laughter is known as 'the best medicine'.

3. One of the well-known advantages of laughter is that it helps forget our sorrow and anger. Suppose, we are in an angry mood, somebody tries to lighten the atmosphere by cracking a joke. Now the humour and lighter content of the joke is bound to have its effect on us. As a result, we will stop sulking and find ourselves laughing. After a good laugh, nobody can continue to be angry. Laughter melts anger. It does the same to sorrow.

Write the option you consider the most appropriate :

(5 marks)

(i) Funny films are very popular because.....

- | | |
|-------------------------------|------------------------------------|
| (a) they are very interesting | (b) they release our tensions |
| (c) everybody loves to laugh | (d) they are in fashion these days |

(ii) When we laugh.....

- | | |
|---------------------------------------|----------------------------------|
| (a) we get refreshment and relaxation | (b) we get more oxygen |
| (c) we get more strength | (d) we get better people to meet |

(iii) Laughter is a very good.....

- | | |
|--------------------------------|------------------------|
| (a) exercise for mind and body | (b) tonic for the mind |
| (c) opportunity to avail of | (d) breathing exercise |

(iv) Anger and sorrow can be removed only by.....

- | | |
|--------------|-------------------|
| (a) love | (b) care |
| (c) laughter | (d) good behavior |

(v) The word "lessons" in paragraph 2 means.....

- | | |
|-------------|---------------------|
| (a) lessons | (b) parts of advice |
| (c) reduces | (d) solves |

SECTION A

Answer any five of the following questions.

(2 × 5 = 10)

1. Find the value of the following using suitable property.

$$297 \times 103 - 297 \times 3$$

2. Write all the prime numbers less than 20

3. Find $(-7) - 8 - (-25)$

4. Find the equivalent fraction of $\frac{2}{9}$ with denominator 63.

5. Solve: $4\frac{2}{5} - 2\frac{1}{5}$

6. Find the distance travelled by Shaina if she takes three rounds of a square park of side 70m.

7. Rani had Rs.18.50. She bought one ice-cream for Rs.11.75. How much money does she have now?

SECTION B

Answer any five of the following questions.

(3 × 5 = 15)

8. A room is 4m long and 3m 50cm wide. How many square metres of carpet are needed to cover the floor of the room?
9. Cost of 105 envelopes is Rs.350. How many envelopes can be purchased for Rs.100?
10. In a college, out of 4320 students, 2300 are girls. Find the ratio of number of boys to the number of girls.
11. Three tankers contain 403 litres, 434 litres and 465 litres of diesel respectively. Find the maximum capacity of a container that can measure the diesel of the three containers exact number of times.
12. Jaidev takes $2\frac{1}{5}$ minutes to walk across the school ground. Rahul takes $\frac{7}{4}$ minutes to do the same. Who takes less time and by what fraction?

13. Give expressions for the following cases.

a. 11 subtracted from $2m$.

b. p multiplied by 17.

c. y is multiplied by -8 and then 5 is added to the result.

14. The town news paper is published every day. One copy has 12 pages. Everyday 11980 copies are printed. How many total pages are printed every day?

IQ & General Awareness (SET-1)

Time: 30 min

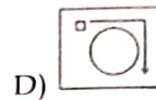
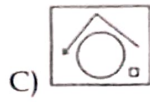
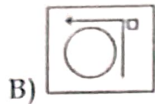
M.M 25

Question 1 to 15 carries 1 mark each and 16 to 20 carries 2 marks

1) An instrument used to measure blood pressure is called

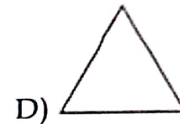
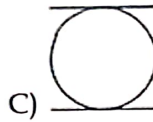
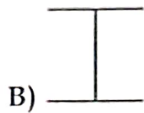
- A) Barometer B) Stethoscope C) Sphygmomanometer D) Otoscope

2) Directions: Choose the one which is different from the others in the following questions:



E) None of these

3) Directions: Choose the one which is different from the others in the following questions:



4. The positions of how many digits in the number 9563782 will remain unchanged when the digits are rearranged in ascending order?

- A) 0 B) 1 C) 2 D) 3 E) None of these

5. Find out the odd one among the following: Cricket, Football, Hockey, Tennis, Badminton

- A) Cricket B) Football C) Badminton D) Tennis

6. Pointing to a Man, Ravi said, "He is the grandfather of my youngest son." How is the Man related to Ravi?

- A) Father B) Son C) Brother D) Sister E) None of these

7. Which of the following organ system helps in protecting internal organs and gives support to the body?

- A) Digestive system B) Excretory system C) Nervous system
D) Skeletal system E) None of these

8. The time is shown in the _____ on the taskbar.

- A) Start menu B) Scrollbar C) Desktop D) Notification area or System Tray

9. Choose a noun that does not belong to the group:

- A) Building B) City C) Mount Everest D) Country

10. Choose the most suitable option:

A _____ of musicians.

A) bunch

B) choir

C) band

D) committee

11. What comes next in the given series? A, C, F, H, K, M.....

A) N

B) Y

C) P

D) M

E) None of these

12. If yesterday was Thursday, when will be Saturday?

A) Day after tomorrow

B) Two days after tomorrow

C) Today

D) Tomorrow

13. Which key is used to move the cursor to the beginning of the next line?

A) Enter key

B) Spacebar key

C) F12 key

D) Shift key

14. 19:00 hours is equal to?

A) 4:00 PM

B) 5:00 PM

C) 6:00 PM

D) 7:00 PM

15. Smallest state of India is?

A) Goa

B) Sikkim

C) Tripura

D) Mizoram

16. $6500 + 500 + 250 + 90 + 5 = ?$

A) 7342

B) 7343

C) 7344

D) 7345

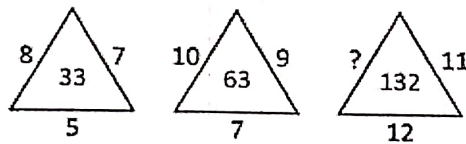
17. What should come in place of the question mark (?) in the following number series? 64, 96, 144, 216, 324, 486?

A) 724

B) 872

C) 729

D) 834



18. Find the missing number:

A) 9

B) 8

C) 7

D) 10

E) None of these

19. Which number should come next in the pattern?

37 34, 31, 28, _____

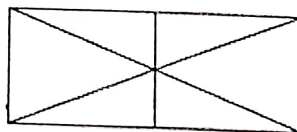
A) 30

B) 35

C) 25

D) 20

20. How many triangles are there in the figure?



A) 10

B) 13

C) 14

D) 15

E) None of these